

The Advanced Placement Examination in Chemistry

Part II - Free Response Questions & Answers 1970 to 2006

Electrochemistry

Teachers may reproduce this publication, in whole or in part, in limited print quantities for non-commercial, face-to-face teaching purposes. This permission does not apply to any third-party copyrights contained within this publication.

Advanced Placement Examination in Chemistry. Questions copyright© 1970-2006 by the College Entrance Examination Board, Princeton, NJ 08541. Reprinted with permission. All rights reserved. apcentral.collegeboard.com. This material may not be mass distributed, electronically or otherwise. This publication and any copies made from it may not be resold.

Portions copyright © 1993-2006 by
Unlimited Potential, Framingham, MA 01701-2619.

Compiled for the Macintosh and PC by:

Harvey Gendreau (*ret.*)
Framingham High School
Framingham, MA 01701-4195
419-735-4782 (fax)

508-877-8723 (home office)
www.apchemistry.com
apchemtchr@aol.com
hgendreau@rcn.com

Requests for copies of these questions and answers as e-mail attachments for either the Macintosh or the PC (MS-Office files) should be sent to:

apchemtchr@aol.com.

Please include your name, school, school phone, name of principal/headmaster and school website address. Don't forget to include the file format you want, Mac or PC.

Electrochemistry

page 2

1970

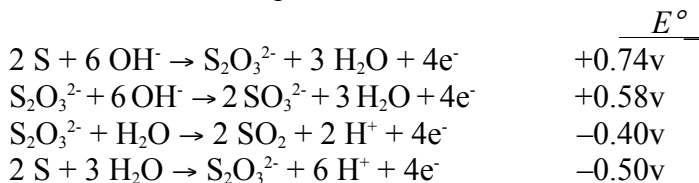
Account for the observation that silver dissolves in 1 molar hydroiodic acid despite the fact that the standard electrode potential for the change, $\text{Ag} \rightarrow \text{Ag}^+ + \text{e}^-$ is -0.80 volt.

Answer:

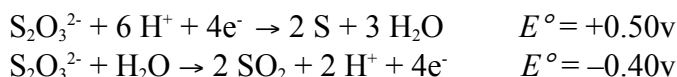
The standard potential is based upon $[\text{Ag}^+] = 1.0$ M. But because AgI is insoluble (very small K_{sp}) the concentration of Ag^+ never reaches 1.0 M. Therefore, the equilibrium is shifted in favor of the production of the ion and the potential under these conditions is > 0 volts.

1970

Why are solutions of thiosulfate for analysis not acidic? Refer to the following standard electrode potentials and write the balanced equation that would account for this fact.



Answer:



The thiosulfate decomposes into sulfur, water, and sulfur dioxide.

1971

Quantitative chemical data are often based on arbitrary standards. Discuss this statement with the following data for fluorine

(a) The atomic weight of fluorine is 19.00

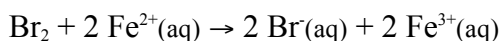
(b) E° , the standard electrode potential, is +2.65 volts for the half reaction: $\text{F}_2 + 2\text{e}^- \rightarrow 2 \text{F}^-$

Answer:


(a) The atomic mass of fluorine is 19.00 times the mass of 1/12 of the mass of a carbon-12 atom. Carbon-12 has been given the standard atomic mass of 12.000...

(b) the fluorine/fluoride potential is 2.65 v better than the half reaction, $2 \text{H}^+ + 2 \text{e}^- \rightarrow \text{H}_2$, which has been given a value of 0.00 v.

1972



For the reaction above, the following data are available:



S° , cal/moleK



(a) Determine ΔS° (b) Determine ΔG°

(c) Determine ΔH°

Answer:

(a) $\Delta S^\circ = \sum S_{\text{product}} - \sum S_{\text{reactant}}$

Electrochemistry

page 3

$$= [(19.6)(2) + (-70.1)(2)] - [58.6 + (-27.1)(2)] \text{ cal}$$


$$= -105.4 \text{ cal}$$

$$(b) \Delta G^\circ = -n\mathfrak{S}E^\circ = -(2)(23060 \text{ cal/v})(0.30 \text{ v}) = -13800 \text{ cal.}$$

$$(c) \Delta G^\circ = \Delta H^\circ - T\Delta S^\circ; \Delta H^\circ = \Delta G^\circ + T\Delta S^\circ$$

$$= -13800 + (298)(-105.4) = -45.4 \text{ kcal}$$

1973 B



- (a) Calculate the standard voltage of a cell involving the system above.
- (b) What is the equilibrium constant for the system above?
- (c) Calculate the voltage at 25°C of a cell involving the system above when the concentration of Ag^+ is 0.0010 molar and that of Sn^{2+} is 0.20 molar.

Answer:

$$(a) E^\circ = [0.80 \text{ v} - (-0.14 \text{ v})] = 0.94 \text{ v}$$

$$(b) E = \frac{0.0592}{n} \log K \quad \text{OR} \quad -nFE = -RT \ln K$$

$$\log K = \frac{0.94 \times 2}{0.0592} = 31.8; \quad K = 6 \times 10^{31}$$

$$(c) E = E^\circ - \frac{RT}{nF} \ln Q; \quad Q = \frac{[\text{Sn}^{2+}]}{[\text{Ag}^+]^2}$$

$$E = 0.94 - \frac{0.0592}{2} \log \frac{0.20}{(0.0010)^2} = 0.81 \text{ v}$$

1974 B

A steady current of 1.00 ampere is passed through an electrolytic cell containing a 1 molar solution of AgNO_3 and having a silver anode and a platinum cathode until 1.54 grams of silver is deposited.

- (a) How long does the current flow to obtain this deposit?
- (b) What weight of chromium would be deposited in a second cell containing 1-molar chromium(III) nitrate and having a chromium anode and a platinum cathode by the same current in the same time as was used in the silver cell?
- (c) If both electrodes were platinum in this second cell, what volume of O_2 gas measured at standard temperature and pressure would be released at the anode while the chromium is being deposited at the cathode? The current and the time are the same as in (b)

Answer:

$$(a) \frac{1.54 \text{ g Ag}}{1.00 \text{ amp}} \times \frac{1 \text{ mol Ag}}{107.9 \text{ g Ag}} \times \frac{1 \text{ mol e}^-}{1 \text{ mol Ag}} \times \frac{96500 \text{ amp_sec}}{1 \text{ mol e}^-} = 1380 \text{ sec.}$$

$$(b) 1.54 \text{ g Ag} \times \frac{1 \text{ mol Ag}}{107.9 \text{ g Ag}} \times \frac{1 \text{ mol e}^-}{1 \text{ mol Ag}} \times \frac{1 \text{ mol Cr}^{3+}}{3 \text{ mol e}^-} \times \frac{52.0 \text{ g Cr}}{1 \text{ mol Cr}^{3+}} = 0.247 \text{ g Cr}$$

$$(c) 2 \text{H}_2\text{O} \rightarrow \text{O}_2 + 4 \text{H}^+ + 4 \text{e}^-$$


$$1.54 \text{ g Ag} \times \frac{1 \text{ mol Ag}}{107.9 \text{ g Ag}} \times \frac{1 \text{ mol e}^-}{1 \text{ mol Ag}} \times \frac{1 \text{ mol O}_2}{4 \text{ mol e}^-} \times \frac{22.4 \text{ L O}_2}{1 \text{ mol O}_2} = 0.0779 \text{ L O}_2$$

Electrochemistry

page 4

1976 B

- (a) Calculate the value of ΔG° for the standard cell reaction



- (b) One half cell of an electrochemical cell is made by placing a strip of pure zinc in 500 milliliters of 0.10 molar ZnCl_2 solution. The other half cell is made by placing a strip of pure copper in 500 milliliters of 0.010 molar $\text{Cu}(\text{NO}_3)_2$ solution. Calculate the initial voltage of this cell when the two half cells are joined by a salt bridge and the two metal strips are joined by a wire.
- (c) Calculate the final concentration of copper ion, Cu^{2+} , in the cell described in part (b) if the cell were allowed to produce an average current of 1.0 ampere for 3 minutes 13 seconds.

Answer:

- (a) $E^\circ = 0.76 + 0.34 = 1.10$ volts

$$\Delta G^\circ = -nFE^\circ = -(2)(23.06\text{kcal/v})(1.10\text{v}) = -50.7 \text{ kcal}$$

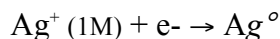
$$E = E^\circ - \frac{0.0591}{n} \log Q = 1.10 - \frac{0.0591}{2} \log \frac{0.10}{0.010}$$

(b) $= 1.07 \text{ v}$

- (c) $(1.0 \text{ amp})(193 \text{ sec.})(1 \text{ farad./}96500 \text{ coul}) =$
 $= 0.0020 \text{ faraday}$
 $0.0020 \text{ faraday}/2 = 0.0010 \text{ mol Cu}^{2+} \text{ reduced}$
 $(0.0050 - 0.0010) \text{ mol} = 0.0040 \text{ mol Cu}^{2+} \text{ remaining}$
 $0.0040 \text{ mol} / 0.500 \text{ L} = 0.0080 \text{ M final } [\text{Cu}^{2+}]$

1978 B

- (a) When 300.0 milliliters of a solution of 0.200 molar AgNO_3 is mixed with 100.0 milliliters of a 0.0500 molar CaCl_2 solution, what is the concentration of silver ion after the reaction has gone to completion?
- (b) Write the net cell reaction for a cell formed by placing a silver electrode in the solution remaining from the reaction above and connecting it to a standard hydrogen electrode.
- (c) Calculate the voltage of a cell of this type in which the concentration of silver ion is $4 \times 10^{-2} \text{ M}$.
- (d) Calculate the value of the standard free energy change ΔG° for the following half reaction:



Answer:

- (a) $\text{Ag}^+ + \text{Cl}^- \rightarrow \text{AgCl}$

$$\text{mol Ag}^+ \text{ added} = (0.300 \text{ L})(0.200 \text{ mol/L}) =$$

$$= 0.0600 \text{ mol}$$

$$\text{mol CaCl}_2 \text{ added} = (0.100 \text{ L})(0.0500 \text{ mol/L}) =$$

$$= 0.00500 \text{ mol}$$

$$\text{mol Cl}^- \text{ added} = 2(0.00500 \text{ mol}) = 0.0100 \text{ mol}$$

$$\text{mol Ag}^+ \text{ remaining} = 0.0600 - 0.0100 = 0.0500 \text{ mol}$$

$$[\text{Ag}^+] \text{ remaining} = \frac{0.0500 \text{ mol}}{0.400 \text{ L}} = 0.125 \text{ M}$$

- (b) $\text{H}_2 + 2 \text{Ag}^+ \rightarrow 2 \text{H}^+ + 2 \text{Ag}$

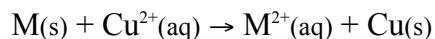
$$(c) \quad E = E_{-} - \frac{0.0591}{n} \log Q; E_{-} = 0.80 \text{ volts}$$

$$Q = \frac{[H^{+}]^2}{[Ag^{+}]^2(P_{H_2})} = \frac{1}{(4 \times 10^{-2})^2} = 625$$

$$E = (0.80 - 0.08) \text{ v} = 0.72 \text{ volt}$$

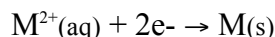
$$(d) \quad \Delta G^{\circ} = -n\mathfrak{S}E^{\circ} = -(1)(96.5 \text{ kJ/mol})(0.80 \text{ v}) = -77 \text{ kJ or } -18 \text{ kcal}$$

1980 B



For the reaction above $E^{\circ} = 0.740 \text{ volt}$ at 25°C

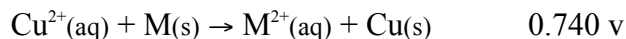
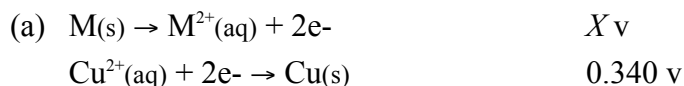
(a) Determine the standard electrode potential for the reduction half reaction:



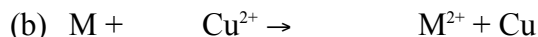
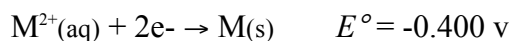
(b) A cell is constructed in which the reaction above occurs. All substances are initially in their standard states, and equal volumes of the solutions are used. The cell is then discharged. Calculate the value of the cell potential E , when $[Cu^{2+}]$ has dropped to 0.20 molar.

(c) Find the ratio $[M^{2+}]_{aq}/[Cu^{2+}]_{aq}$ when the cell reaction above reaches equilibrium.

Answer:



$$X (\text{oxid. potential}) = 0.740 \text{ v} - 0.340 \text{ v} = 0.400 \text{ v}$$



initial: 1.00 M 1.00 M

change: -0.80 M +0.80 M

final: 0.20 M +1.80 M

$$E_{\text{cell}} = E_{-} - \frac{0.0591}{n} \log Q$$

$$= 0.740 - \frac{0.0591}{n} \log \frac{[M^{2+}]}{[Cu^{2+}]}$$

$$= 0.740 - \frac{0.0591}{2} \log \frac{1.80}{0.20} = 0.712 \text{ v}$$

(c) At equilibrium, $E_{\text{cell}} = 0$

$$E_{\text{cell}} = 0 = E_{-} - \frac{0.0591}{n} \log \frac{[M^{2+}]}{[Cu^{2+}]}$$

$$E_{-} = \frac{0.0591}{n} \log \frac{[M^{2+}]}{[Cu^{2+}]}$$

Electrochemistry

page 6

$$\log \frac{[M^{2+}]}{[Cu^{2+}]} = \frac{E_{\text{cell}}}{0.0591} = \frac{(0.0740)(2)}{0.0591} = 25.0$$

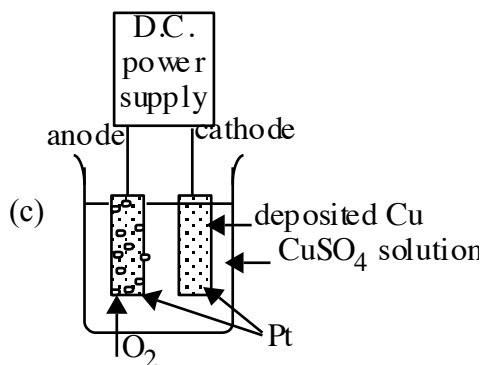
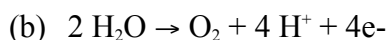
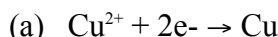
$$\frac{[M^{2+}]}{[Cu^{2+}]} = 1 \times 10^{25}$$

1981 D

A solution of $CuSO_4$ was electrolyzed using platinum electrodes by passing a current through the solution. As a result, there was a decrease in both $[Cu^{2+}]$ and the solution pH; one electrode gained in weight a gas was evolved at the other electrode.

- Write the cathode half reaction that is consistent with the observations above.
- Write the anode half reaction that is consistent with the observations above.
- Sketch an apparatus that can be used for such an experiment and label its necessary components.
- List the experimental measurements that would be needed in order to determine from such an experiment the value of the faraday.

Answer:



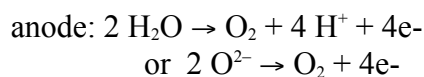
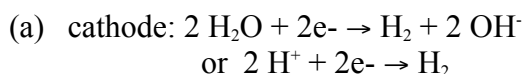
- (d) current; time; mass of cathode before and its mass after passage of current - or - volume of O_2 released with its temperature and pressure.

1982 B

When a dilute solution of H_2SO_4 is electrolyzed, $O_2(g)$ is produced at the anode and $H_2(g)$ is produced at the cathode.

- Write the balanced equations for the anode, cathode, and overall reactions that occur in this cell.
- Compute the coulombs of charge passed through the cell in 100. minutes at 10.0 amperes.
- What number of moles of O_2 is produced by the cell when it is operated for 100. minutes at 10.0 amperes?
- The standard enthalpy of formation of $H_2O(g)$ is -242 kilojoules per mole. How much heat is liberated by the complete combustion, at 298K and 1.00 atmospheres, of the hydrogen produced by the cell operated as in (c)?

Answer:



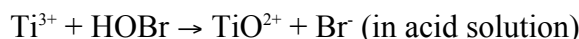
Electrochemistry

page 7

overall: $2 \text{H}_2\text{O} \rightarrow 2 \text{H}_2 + \text{O}_2$

- (b) $(10.0 \text{ amp})(10.0 \text{ min})(60 \frac{\text{sec}}{\text{min}}) = 6.00 \times 10^4 \text{ coul.}$
- (c) $6.00 \times 10^4 \text{ coul} \times \frac{1 \text{ mol e}^-}{96489 \text{ coul.}} \times \frac{1 \text{ mol O}_2}{4 \text{ mol e}^-} = 0.155 \text{ mol O}_2$
- (d) from ΔH_f° for H_2O :
- $$\text{H}_2(\text{g}) + \frac{1}{2} \text{O}_2(\text{g}) \rightarrow \text{H}_2\text{O}(\text{g}) \quad \Delta H = -242 \text{ kJ}$$
- $$0.155 \text{ mol O}_2 \times \frac{2 \text{ mol H}_2\text{O}}{1 \text{ mol O}_2} \times \frac{-242 \text{ kJ}}{1 \text{ mol H}_2\text{O}} = -75.0 \text{ kJ} \quad \text{when the H}_2 \text{ is burned.}$$

1983 C



- (a) Write the correctly balanced half-reactions and net ionic equation for the skeletal equation shown above.
- (b) Identify the oxidizing agent and the reducing agent in this reaction.
- (c) A galvanic cell is constructed that utilizes the reaction above. The concentration of each species is 0.10 molar. Compare the cell voltage that will be observed with the standard cell potential. Explain your reasoning.
- (d) Give one example of a property of this reaction, other than the cell voltage, that can be calculated from the standard cell potential, E° . State the relationship between E° and the property you have specified.

Answer:

- (a) $\text{Ti}^{3+} + \text{H}_2\text{O} \rightarrow \text{TiO}^{2+} + 2 \text{H}^+ + \text{e}^-$
 $\text{H}^+ + \text{HOBr} + 2\text{e}^- \rightarrow \text{Br}^- + \text{H}_2\text{O}$
 $2 \text{Ti}^{3+} + \text{HOBr} + \text{H}_2\text{O} \rightarrow 2 \text{TiO}^{2+} + 3 \text{H}^+ + \text{Br}^-$
- (b) HOBr is the oxidizing agent and Ti^{3+} is the reducing agent.
- (c) The observed voltage will be greater than the E° value since:
- $$E = E^\circ - \frac{0.059}{2} \log(0.1)^3$$
- (d) Identification of a property from the group: ΔG , K , pH
- (e) $\Delta G^\circ = -n\mathfrak{F}E^\circ$ or $E^\circ = \frac{0.059}{n} \log K$

1985 B


- (a) Titanium can be reduced in an acid solution from TiO^{2+} to Ti^{3+} with zinc metal. Write a balanced equation for the reaction of TiO^{2+} with zinc in acid solution.
- (b) What mass of zinc metal is required for the reduction of a 50.00 millilitre sample of a 0.115 molar solution of TiO^{2+} ?
- (c) Alternatively, the reduction of TiO^{2+} to Ti^{3+} can be carried out electrochemically. What is the minimum time, in seconds, required to reduce another 50.000 millilitre sample of the 0.115 molar TiO^{2+} solution with a direct current of 1.06 amperes?
- (d) The standard reduction potential, E° , for TiO^{2+} to Ti^{3+} is +0.060 volt. The standard reduction potential, E° , for Zn^{2+} to $\text{Zn}_{(\text{s})}$ is -0.763 volt. Calculate the standard cell potential, E° , and the standard free energy change, ΔG° , for the reaction described in part (a).

Answer:

- (a) $\text{Zn} \rightarrow \text{Zn}^{2+} + 2\text{e}^-$
 $2 \text{TiO}^{2+} + 4 \text{H}^+ + 2\text{e}^- \rightarrow 2 \text{Ti}^{3+} + 2 \text{H}_2\text{O}$
-

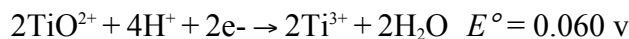
Electrochemistry

page 8



$$(b) 0.0500 \text{ L} \times \frac{0.115 \text{ mol TiO}^{2+}}{1 \text{ L}} \times \frac{1 \text{ mol Zn}}{1 \text{ mol TiO}^{2+}} \times \frac{65.4 \text{ g Zn}}{1 \text{ mol Zn}} = 0.188 \text{ g Zn}$$

$$(c) 0.500 \text{ L} \times \frac{0.115 \text{ mol TiO}^{2+}}{1 \text{ L}} \times \frac{1 \text{ mol e}^-}{1 \text{ mol TiO}^{2+}} \times \frac{96500 \text{ coul}}{1 \text{ mol e}^-} \times \frac{1 \text{ amp_sec}}{1 \text{ coul.}} \times \frac{1}{1.06 \text{ amp}} = 523 \text{ sec.}$$



$$E^\circ = 0.823 \text{ v}$$

$$\Delta G^\circ = -nFE^\circ = -2 \text{ mol e}^- \times \frac{96500 \text{ coul}}{1 \text{ mol e}^-} \times \frac{0.823 \text{ v}}{1} \times \frac{1 \text{ J}}{1 \text{ v_coul}} = -1.59 \times 10^5 \text{ J}$$

1986 B

A direct current of 0.125 ampere was passed through 200 millilitres of a 0.25 molar solution of $\text{Fe}_2(\text{SO}_4)_3$ between platinum electrodes for a period of 1.100 hours. Oxygen gas was produced at the anode. The only change at the cathode was a slight change in the color of the solution.

At the end of the electrolysis, the electrolyte was acidified with sulfuric acid and was titrated with an aqueous solution of potassium permanganate. The volume of the KMnO_4 solution required to reach the end point was 24.65 millilitres.

- How many faradays were passed through the solution?
- Write a balanced half-reaction for the process that occurred at the cathode during the electrolysis.
- Write a balanced net ionic equation for the reaction that occurred during the titration with potassium permanganate.
- Calculate the molarity of the KMnO_4 solution.

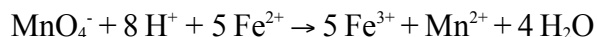
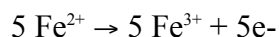
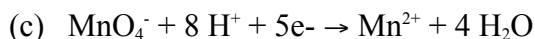
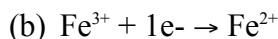
Answer:

$$(a) (1.100 \text{ hr})(3600 \text{ sec/hr}) = 3960 \text{ sec.}$$

$$(3960 \text{ sec})(0.125 \text{ amp}) = 495 \text{ coul}$$

$$\frac{1 \text{ farad}}{96500 \text{ coul}}$$

$$495 \text{ coul} \times \frac{1 \text{ farad}}{96500 \text{ coul}} = 5.13 \times 10^{-3} \text{ faraday}$$



$$(d) 5.13 \times 10^{-3} \text{ farad} \times \frac{1 \text{ mol Fe}^{2+}}{1 \text{ farad}} \times \frac{1 \text{ mol MnO}_4^-}{5 \text{ mol Fe}^{2+}} \times \frac{1}{0.02465 \text{ L}} = 0.0416 \text{ M MnO}_4^-$$

1987 D

A dilute solution of sodium sulfate, Na_2SO_4 , was electrolyzed using inert platinum electrodes. In a separate experiment, a concentrated solution of sodium chloride, NaCl , was electrolyzed also using inert platinum electrodes. In each experiment, gas formation was observed at both electrodes.

- Explain why metallic sodium is not formed in either experiment.
- Write balanced equations for the half-reactions that occur at the electrodes during electrolysis of the dilute sodium sulfate solution. Clearly indicate which half-reaction occurs at each electrode.

Electrochemistry

page 9

- (c) Write balanced equations for the half-reactions that occur at the electrodes during electrolysis of the concentrated sodium chloride solution. Clearly indicate which half-reaction occurs at each electrode.
- (d) Select two of the gases obtained in these experiments, and for each gas, indicate one experimental procedure that can be used to identify it.

Answer:

- (a) Na^+ is not reduced as easily as H_2O (or H^+ or OH^-). **OR**
If Na(s) were formed, it would rapidly react with water to reform Na^+ .
- (b) Anode: $2 \text{H}_2\text{O} \rightarrow \text{O}_2 + 4 \text{H}^+ + 4\text{e}^-$
cathode: $2 \text{H}_2\text{O} + 2\text{e}^- \rightarrow \text{H}_2 + 2 \text{OH}^-$
or: $2 \text{H}^+ + 2\text{e}^- \rightarrow \text{H}_2$
- (c) anode: $2 \text{Cl}^- \rightarrow \text{Cl}_2 + 2\text{e}^-$
cathode: $2 \text{H}_2\text{O} + 2\text{e}^- \rightarrow \text{H}_2 + 2 \text{OH}^-$
or: $2 \text{H}^+ + 2\text{e}^- \rightarrow \text{H}_2$
- (d) H_2 - "pop" with a lit splint; O_2 - ignites a glowing splint; Cl_2 - yellowish-green color
(other suitable tests accepted)

1988 B

An electrochemical cell consists of a tin electrode in an acidic solution of 1.00 molar Sn^{2+} connected by a salt bridge to a second compartment with a silver electrode in an acidic solution of 1.00 molar Ag^+ .

- (a) Write the equation for the half-cell reaction occurring at each electrode. Indicate which half-reaction occurs at the anode.
- (b) Write the balanced chemical equation for the overall spontaneous cell reaction that occurs when the circuit is complete. Calculate the standard voltage, E° , for this cell reaction.
- (c) Calculate the equilibrium constant for this cell reaction at 298K.
- (d) A cell similar to the one described above is constructed with solutions that have initial concentrations of 1.00 molar Sn^{2+} and 0.0200 molar Ag^+ . Calculate the initial voltage, E° , of this cell.

Answer:

- (a) $\text{Sn} \rightarrow \text{Sn}^{2+} + 2\text{e}^-$ anode reaction
 $\text{Ag}^+ + \text{e}^- \rightarrow \text{Ag}$
- (b) $2 \text{Ag}^+ + \text{Sn} \rightarrow 2 \text{Ag} + \text{Sn}^{2+}$
 $E^\circ = [0.80\text{v} - (-0.14\text{v})] = 0.94\text{v}$
- (c) $E = \frac{0.0592}{n} \log K$ OR $-nFE = -RT \ln K$
 $\log K = \frac{0.94 \times 2}{0.0592} = 31.8$; $K = 6 \times 10^{31}$
- (d) $E = E^\circ - \frac{RT}{nF} \ln Q$; $Q = \frac{[\text{Sn}^{2+}]}{[\text{Ag}^+]^2}$
 $E = 0.94 - \frac{0.0592}{2} \log \frac{1}{(0.02)^2} = 0.84\text{v}$

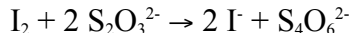
1989 B

The electrolysis of an aqueous solution of potassium iodide, KI, results in the formation of hydrogen gas at the cathode and iodine at the anode. A sample of 80.0 millilitres of a 0.150 molar solution of KI was electrolyzed

Electrochemistry

page 10

for 3.00 minutes, using a constant current. At the end of this time, the I_2 produced was titrated against a 0.225 molar solution of sodium thiosulfate, which reacts with iodine according to the equation below. The end point of the titration was reached when 37.3 millilitres of the $Na_2S_2O_3$ solution had been added.



- How many moles of I_2 was produced during the electrolysis?
- The hydrogen gas produced at the cathode during the electrolysis was collected over water at $25^\circ C$ at a total pressure of 752 millimetres of mercury. Determine the volume of hydrogen collected. (The vapor pressure of water at $25^\circ C$ is 24 millimetres of mercury.)
- Write the equation for the half-reaction that occurs at the anode during the electrolysis.
- Calculate the current used during the electrolysis.

Answer:

$$(a) \quad 0.0373L \times \frac{0.225 \text{ mol } S_2O_3^{2-}}{1L} \times \frac{1 \text{ mol } I_2}{2 \text{ mol } S_2O_3^{2-}} =$$

$$= 4.20 \times 10^{-3} \text{ mol } I_2$$

$$(b) \quad P_{H_2} = P_{\text{total}} - P_{H_2O} = (752 - 24) \text{ mm Hg} = 728 \text{ mm Hg}$$

$$1 \text{ mol } H_2 = 1 \text{ mol } I_2$$

$$PV = nRT ; V = nRT/P$$

$$V = \frac{(4.20 \times 10^{-3} \text{ mol})(0.0821 \frac{L \cdot \text{atm}}{\text{mol} \cdot K})(298K)}{(\frac{728}{760}) \text{ atm}} = 0.107 \text{ L}$$

$$(c) \quad \text{At anode: } 2 I^- \rightarrow I_2 + 2e^-$$

$$(d) \quad 4.20 \times 10^{-3} \text{ mol } I_2 \times \frac{2 \text{ mol } e^-}{1 \text{ mol } I_2} \times \frac{96489 \text{ amp} \cdot \text{sec}}{1 \text{ mol } e^-} \times \frac{1 \text{ min}}{60 \text{ sec.}} \times \frac{1}{3 \text{ min.}} = 4.50 \text{ amp}$$

1991 D

Explain each of the following.

- When an aqueous solution of $NaCl$ is electrolyzed, $Cl_2(g)$ is produced at the anode, but no $Na(s)$ is produced at the cathode.
- The mass of $Fe(s)$ produced when 1 faraday is used to reduce a solution of $FeSO_4$ is 1.5 times the mass of $Fe(s)$ produced when 1 faraday is used to reduce a solution of $FeCl_3$.
- $Zn + Pb^{2+} (1\text{-molar}) \rightarrow Zn^{2+} (1\text{-molar}) + Pb$
The cell that utilizes the reaction above has a higher potential when $[Zn^{2+}]$ is decreased and $[Pb^{2+}]$ is held constant, but a lower potential when $[Pb^{2+}]$ is decreased and $[Zn^{2+}]$ is held constant.
- The cell that utilizes the reaction given in (c) has the same cell potential as another cell in which $[Zn^{2+}]$ and $[Pb^{2+}]$ are each 0.1-molar.

Answer:

- Cl^- is more easily oxidized than water
water is more easily reduced than Na^+
- Fe^{2+} req. $2 \frac{\text{farad}}{\text{mol}} Fe(s)$ or 1 farad $\rightarrow \frac{1}{2} \text{ mol } Fe(s)$
 Fe^{3+} req. $3 \frac{\text{farad}}{\text{mol}} Fe(s)$ or 1 farad $\rightarrow \frac{1}{3} \text{ mol } Fe(s)$
for equal numbers of farad $1/2 : 1/3 :: 1.5 : 1$
- using LeChatelier's principle
if $[Zn^{2+}] \downarrow$, reaction shifts \rightarrow , \therefore cell potential \uparrow

Electrochemistry

page 11

if $[\text{Pb}^{2+}] \downarrow$, reaction shifts \leftarrow , \therefore cell potential \downarrow

or using the Nernst Equation

$$E_{\text{cell}} = E^\circ - RT \ln Q, \text{ where } Q = [\text{Zn}^{2+}]/[\text{Pb}^{2+}],$$

if $[\text{Zn}^{2+}] \downarrow$, $Q < 1$, $E_{\text{cell}} > E^\circ$

if $[\text{Pb}^{2+}] \downarrow$, $Q > 1$, $E_{\text{cell}} < E^\circ$

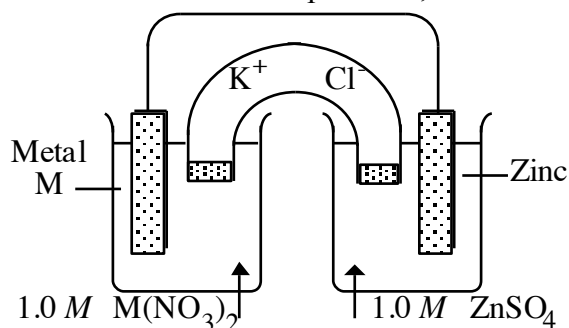
(d) $[\text{Zn}^{2+}]/[\text{Pb}^{2+}]$ does not change regardless of the values, $\therefore E_{\text{cell}} = E^\circ$

or $[\text{Zn}^{2+}]/[\text{Pb}^{2+}] = 1$; $\ln Q = 0$; $E_{\text{cell}} = E^\circ$

1992 B

An unknown metal M forms a soluble compound, $\text{M}(\text{NO}_3)_2$.

- (a) A solution of $\text{M}(\text{NO}_3)_2$ is electrolyzed. When a constant current of 2.50 amperes is applied for 35.0 minutes, 3.06 grams of the metal M is deposited. Calculate the molar mass of M and identify the metal.
- (b) The metal identified in (a) is used with zinc to construct a galvanic cell, as shown below. Write the net ionic equation for the cell reaction and calculate the cell potential, E° .



- (c) Calculate the value of the standard free energy change, ΔG° , at 25°C for the reaction in (b).
- (d) Calculate the potential, E , for the cell shown in (b) if the initial concentration of ZnSO_4 is 0.10-molar, but the concentration of the $\text{M}(\text{NO}_3)_2$ solution remains unchanged.

Answer:

$$(a) \quad 2.50 \text{ amp} \times \frac{1 \text{ mol } e^-}{96500 \text{ amp}_{\text{sec}}} \times \frac{60 \text{ sec.}}{1 \text{ min.}} \times \frac{35.0 \text{ min}}{1} \times \frac{1 \text{ mol M}}{2 \text{ mol } e^-} = 2.72 \times 10^{-2} \text{ mol}$$

$$3.06 \text{ g} / 2.72 \times 10^{-2} \text{ mol} = 112 \text{ g/mol}; \therefore \text{metal is Cd}$$



$$(c) \quad \Delta G^\circ = -n\mathfrak{F}E^\circ = -(2)(96.5 \text{ kJ/v})(0.36 \text{ v}) = -69 \text{ kJ}$$

$$(d) \quad E_{\text{cell}} = E^\circ - \frac{0.0592}{n} \log \frac{[\text{Zn}^{2+}]}{[\text{Cd}^{2+}]}$$

$$E_{\text{cell}} = 0.36 \text{ v} - \frac{0.0592}{2} \log \frac{0.10}{1} = 0.39 \text{ v}$$

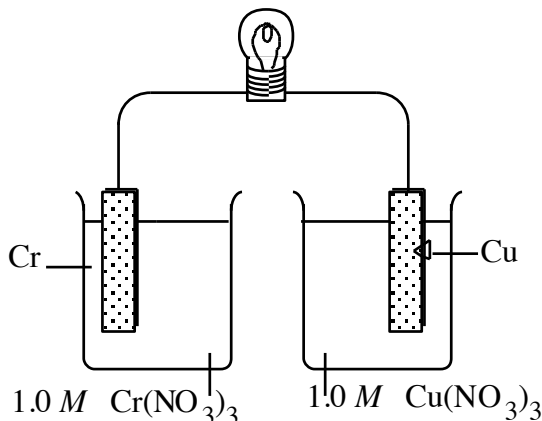
1993 D

Electrochemistry

page 12

A galvanic cell is constructed using a chromium electrode in a 1.00-molar solution of $\text{Cr}(\text{NO}_3)_3$ and a copper electrode in a 1.00-molar solution of $\text{Cu}(\text{NO}_3)_2$. Both solutions are at 25°C .

- (a) Write a balanced net ionic equation for the spontaneous reaction that occurs as the cell operates. Identify the oxidizing agent and the reducing agent.
- (b) A partial diagram of the cell is shown below.

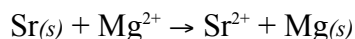


- (i) Which metal is the cathode?
- (ii) What additional component is necessary to make the cell operate?
- (iii) What function does the component in (ii) serve?
- (c) How does the potential of this cell change if the concentration of $\text{Cr}(\text{NO}_3)_3$ is changed to 3.00-molar at 25°C ? Explain.

Answer:

- (a) $2 \text{Cr} + 3 \text{Cu}^{2+} \rightarrow 2 \text{Cr}^{3+} + 3 \text{Cu}$
 Cr = reducing agent; Cu^{2+} = oxidizing agent
- (b) (i) Cu is cathode
(ii) salt bridge
(iii) transfer of ions or charge but not electrons
- (c) E_{cell} decreases.
use the Nernst equation to explain answer

1996 D



Consider the reaction represented above that occurs at 25°C . All reactants and products are in their standard states. The value of the equilibrium constant, K_{eq} , for the reaction is 4.2×10^{17} at 25°C .

- (a) Predict the sign of the standard cell potential, E° , for a cell based on the reaction. Explain your prediction.
- (b) Identify the oxidizing agent for the spontaneous reaction.
- (c) If the reaction were carried out at 60°C instead of 25°C , how would the cell potential change? Justify your answer.
- (d) How would the cell potential change if the reaction were carried out at 25°C with a 1.0-molar solution of $\text{Mg}(\text{NO}_3)_2$ and a 0.10-molar solution of $\text{Sr}(\text{NO}_3)_2$? Explain.
- (e) When the cell reaction in (d) reaches equilibrium, what is the cell potential?

Answer:

Electrochemistry

page 13

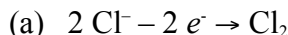
- (a) (+); $K > 1$ OR reaction is spontaneous OR E° for Sr^{2+} is more positive OR E° for Sr is more negative OR $E^\circ = +0.52 \text{ V}$
- (b) Mg^{2+}
- (c) increase; $E^\circ = \frac{RT}{nF} \ln Q$, when $Q = 1$ then as T increases so does E° .
- (d) increase; $E_{\text{cell}} = E^\circ - \frac{0.025 \text{ V}}{n} \ln Q$, when $Q = \frac{0.10}{1}$ then E_{cell} becomes larger.
- OR an explanation using LeChâtelier's Principle.
- (e) $E_{\text{cell}} = 0$

1997 B

In an electrolytic cell, a current of 0.250 ampere is passed through a solution of a chloride of iron, producing $\text{Fe}(s)$ and $\text{Cl}_2(g)$.

- (a) Write the equation for the half-reaction that occurs at the anode.
- (b) When the cell operates for 2.00 hours, 0.521 gram of iron is deposited at one electrode. Determine the formula of the chloride of iron in the original solution.
- (c) Write the balanced equation for the overall reaction that occurs in the cell.
- (d) How many liters of $\text{Cl}_2(g)$, measured at 25°C and 750 mm Hg, are produced when the cell operates as described in part (b) ?
- (e) Calculate the current that would produce chlorine gas from the solution at a rate of 3.00 grams per hour.

Answer:

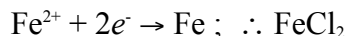


(b) $0.250 \text{ amp} \times 7200 \text{ sec} = 1800 \text{ coulomb}$

$$1800 \text{ coul} \times \frac{1 \text{ mol } e^-}{96500 \text{ coul}} = 0.0187 \text{ mol } e^-$$

$$0.521 \text{ g Fe} \times \frac{1 \text{ mol Fe}}{55.85 \text{ g Fe}} = 0.00933 \text{ mol Fe}$$

$$\frac{0.0187 \text{ mol } e^-}{0.00933 \text{ mol Fe}} = \frac{2}{1}$$



(d) $0.0187 \text{ mol } e^- \times \frac{1 \text{ mol } \text{Cl}_2}{2 \text{ mol } e^-} = 0.00933 \text{ mol } \text{Cl}_2$

$$V = \frac{nRT}{P} =$$

$$= 0.231 \text{ L}$$

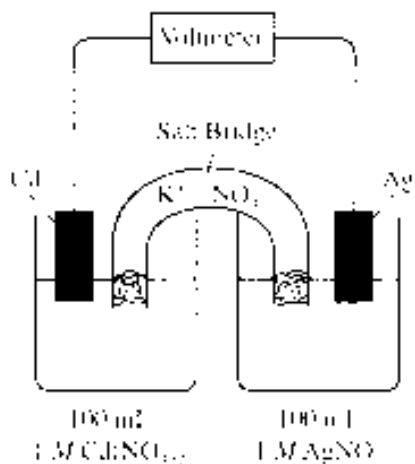
(e) $\frac{3.00 \text{ g } \text{Cl}_2}{1 \text{ hr}} \times \frac{1 \text{ hr}}{3600 \text{ sec}} \times \frac{1 \text{ mol } \text{Cl}_2}{70.906 \text{ g } \text{Cl}_2} \times \frac{2 \text{ mol } e^-}{1 \text{ mol } \text{Cl}_2} \times \frac{96500 \text{ amp_sec}}{1 \text{ mol } e^-} = 2.27 \text{ amp}$

OR

$$\frac{0.00933 \text{ mol } \text{Cl}_2}{2 \text{ hrs.}} = \frac{0.662 \text{ g } \text{Cl}_2}{2 \text{ hrs.}} = \frac{0.331 \text{ g } \text{Cl}_2}{1 \text{ hr.}}$$

$$\frac{0.250 \text{ amp}}{0.331 \text{ g Cl}_2} = \frac{X}{3.00 \text{ g Cl}_2} ; X = 2.27 \text{ amp}$$

1998 D



Answer the following questions regarding the electrochemical cell shown.

- Write the balanced net-ionic equation for the spontaneous reaction that occurs as the cell operates, and determine the cell voltage.
- In which direction do anions flow in the salt bridge as the cell operates? Justify your answer.
- If 10.0 mL of 3.0-molar AgNO_3 solution is added to the half-cell on the right, what will happen to the cell voltage? Explain.
- If 1.0 gram of solid NaCl is added to each half-cell, what will happen to the cell voltage? Explain.
- If 20.0 mL of distilled water is added to both half-cells, the cell voltage decreases. Explain.

Answer

- $$2 \text{Ag}^+ + 2 e^- \rightarrow 2 \text{Ag} \quad E^\circ = +0.80 \text{ v}$$

$$\text{Cd} - 2 e^- \rightarrow \text{Cd}^{2+} \quad E^\circ = +0.40 \text{ v}$$

$$2 \text{Ag}^+ + \text{Cd} \rightarrow 2 \text{Ag} + \text{Cd}^{2+} \quad E = +1.20 \text{ v}$$
- Anions flow into the cadmium half-cell. As the cell operates, Cd^{2+} cations increase in number and need to be balanced by an equal number of anion charges from the salt bridge.
- Cell voltage will increase. An increase in silver ion concentration will result in faster forward reaction and a higher cell potential.
- Cell voltage will decrease. As the salt dissolves, the Cl^- ion will cause the Ag^+ ion to precipitate as AgCl and decrease the $[\text{Ag}^+]$. This will result in a slower forward reaction and a decrease in cell potential. Since cadmium chloride is a soluble salt, it will not affect the cadmium half-cell.

(e) $E_{\text{cell}} = 1.20 \text{ v} - \frac{0.0592}{2} \log \frac{[\text{Cd}^{2+}]}{[\text{Ag}^+]^2}$; while both concentrations are 1.0M, the cell potential is 1.20v. But if each solution's concentration is cut in half, then, $E_{\text{cell}} = 1.20 \text{ v} - \frac{0.0592}{2} \log \frac{[.5]}{[.5]^2} = 1.19 \text{ v}$

2000 B

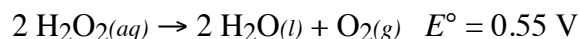
2. Answer the following questions that relate to electrochemical reactions.

- Under standard conditions at 25°C, Zn(s) reacts with $\text{Co}^{2+}(\text{aq})$ to produce Co(s) .

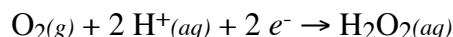
Electrochemistry

page 15

- (i) Write the balanced equation for the oxidation half reaction.
 (ii) Write the balanced net-ionic equation for the overall reaction.
 (iii) Calculate the standard potential, E° , for the overall reaction at 25°C .
 (b) At 25°C , H_2O_2 decomposes according to the following equation.



- (i) Determine the value of the standard free energy change, ΔG° , for the reaction at 25°C .
 (ii) Determine the value of the equilibrium constant, K_{eq} , for the reaction at 25°C .
 (iii) The standard reduction potential, E° , for the half reaction $\text{O}_{2(g)} + 4 \text{H}^+_{(aq)} + 4 e^- \rightarrow 2 \text{H}_2\text{O}_{(l)}$ has a value of 1.23 V. Using this information in addition to the information given above, determine the value of the standard reduction potential, E° for the half reaction below.



- (c) In an electrolytic cell, $\text{Cu}_{(s)}$ is produced by the electrolysis of $\text{CuSO}_{4(aq)}$. Calculate the maximum mass of $\text{Cu}_{(s)}$ that can be deposited by a direct current of 100. amperes passed through 5.00 L of 2.00 M $\text{CuSO}_{4(aq)}$ for a period of 1.00 hour.

Answer:

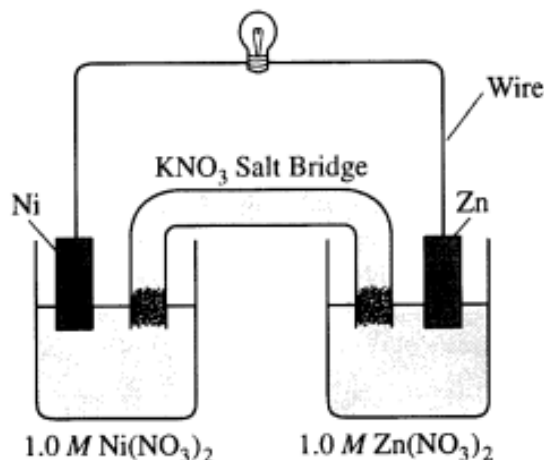
- (a) (i) $\text{Zn}_{(s)} - 2 e^- \rightarrow \text{Zn}^{2+}_{(aq)}$
 (ii) $\text{Zn}_{(s)} + \text{Co}^{2+}_{(aq)} \rightarrow \text{Zn}^{2+}_{(aq)} + \text{Co}_{(s)}$
 (iii) oxid: $\text{Zn}_{(s)} - 2 e^- \rightarrow \text{Zn}^{2+}_{(aq)} \quad E^\circ = +0.76\text{V}$
 red: $\text{Co}^{2+}_{(aq)} + 2 e^- \rightarrow \text{Co}_{(s)} \quad E^\circ = \underline{-0.28\text{V}}$
 $\quad \quad \quad +0.48\text{V}$
 (b) (i) $\Delta G^\circ = -nFE^\circ = -(2)(96500)(0.55) = -106 \text{ kJ}$
 (ii) $K_{\text{eq}} = e^{-\Delta G/RT} = e^{-(-106150)/(8.31)(298)} = 4.13 \times 10^{18}$
 (iii) $\cancel{2 \text{H}_2\text{O}_{(l)}} + \text{O}_{2(g)} \rightarrow 2 \text{H}_2\text{O}_{2(aq)} \quad E^\circ = -0.55 \text{ V}$
 $\text{O}_{2(g)} + 4 \text{H}^+_{(aq)} + 4 e^- \rightarrow \cancel{2 \text{H}_2\text{O}_{(l)}} \quad E^\circ = 1.23 \text{ V}$

 $2 \text{O}_{2(g)} + 4 \text{H}^+_{(aq)} + 4 e^- \rightarrow 2 \text{H}_2\text{O}_{2(aq)} \quad E^\circ = 0.68 \text{ V}$

divide the equation by 2 but keep the E° the same.

$$(d) 1.00 \text{ hr} \times \frac{3600 \text{ sec}}{1 \text{ hr}} \times 100. \text{ amp} \times \frac{1 \text{ coul.}}{1 \text{ amp} \cdot \text{sec}} \times \frac{1 \text{ mol } e^-}{96500 \text{ coul.}} \times \frac{1 \text{ mol Cu}}{2 \text{ mol } e^-} \times \frac{63.55 \text{ g Cu}}{1 \text{ mol Cu}} = 119 \text{ g Cu}$$

2001 D



Answer the following questions that refer to the galvanic cell shown in the diagram above. (A table of standard reduction potentials is printed on the green insert and on page 4 of the booklet with the pink cover.)

- Identify the anode of the cell and write the half reaction that occurs there.
- Write the net ionic equation for the overall reaction that occurs as the cell operates and calculate the value of the standard cell potential, E°_{cell} .
- Indicate how the value of E_{cell} would be affected if the concentration of $\text{Ni}(\text{NO}_3)_2(\text{aq})$ was changed from 1.0 M to 0.10 M and the concentration of $\text{Zn}(\text{NO}_3)_2(\text{aq})$ remained at 1.0 M. Justify your answer.
- Specify whether the value of K_{eq} for the cell reaction is less than 1, greater than 1, or equal to 1. Justify your answer.


Answer:

- zinc; $\text{Zn}(\text{s}) \rightarrow \text{Zn}^{2+}(\text{aq}) + 2\text{e}^-$
- $\text{Zn}(\text{s}) + \text{Ni}^{2+}(\text{aq}) \rightarrow \text{Zn}^{2+}(\text{aq}) + \text{Ni}(\text{s})$
 $E^\circ_{\text{cell}} = +0.76 + (-0.25)\text{ V} = +0.51\text{ V}$
- decrease E_{cell} ; $E_{\text{cell}} = E^\circ_{\text{cell}} - \frac{0.0592}{2} \log Q$, $Q = \frac{[\text{Zn}^{2+}]}{[\text{Ni}^{2+}]}$, when the value of Q becomes larger than 1 then the $\log Q > 1$ and is subtracted from the standard potential of the cell.
- greater than 1. All spontaneous reactions (this reaction is spontaneous because the cell potential is larger than 0) have a K_{eq} that are larger than 1, which favors the formation of products.

2002 B

Answer parts (a) through (e) below, which relate to reactions involving silver ion, Ag^+ .

The reaction between silver ion and solid zinc is represented by the following equation.




- A 1.50 g sample of Zn is combined with 250. mL of 0.110 M AgNO_3 at 25°C.
 - Identify the limiting reactant. Show calculations to support your answer.
 - On the basis of the limiting reactant that you identified in part (i), determine the value of $[\text{Zn}^{2+}]$ after the reaction is complete. Assume that volume change is negligible.
- Determine the value of the standard potential, E° , for a galvanic cell based on the reaction between $\text{AgNO}_3(\text{aq})$ and solid Zn at 25°C.

Another galvanic cell is based on the reaction between $\text{Ag}^+(\text{aq})$ and $\text{Cu}(\text{s})$, represented by the equation below. At 25°C, the standard potential, E° , for the cell is 0.46 V.

Electrochemistry

page 17



- (c) Determine the value of the standard free-energy change, ΔG° , for the reaction between $\text{Ag}^+(aq)$ and $\text{Cu}(s)$ at 25°C .
- (d) The cell is constructed so that $[\text{Cu}^{2+}]$ is 0.045 M and $[\text{Ag}^+]$ is 0.010 M . Calculate the value of the potential, E , for the cell.
- (e) Under the conditions specified in part (d), is the reaction in the cell spontaneous? Justify your answer.

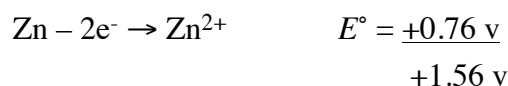
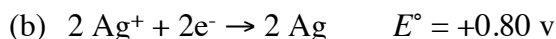
Answer:

- (a) (i) AgNO_3 solution

$1.50 \text{ g Zn} \times \frac{1 \text{ mol Zn}}{65.39 \text{ g Zn}} \times \frac{2 \text{ mol Ag}^+}{1 \text{ mol Zn}} \times \frac{1000 \text{ mL}}{0.110 \text{ mol Ag}^+} = 417 \text{ mL}$ of silver nitrate solution required to completely react the zinc, therefore, AgNO_3 is the limiting reagent.

$$(ii) 250 \text{ mL AgNO}_3 \times \frac{0.110 \text{ mol AgNO}_3}{1000 \text{ mL}} \times \frac{1 \text{ mol Ag}^+}{1 \text{ mol AgNO}_3} \times \frac{1 \text{ mol Zn}}{2 \text{ mol Ag}^+} = 0.01375 \text{ mol Zn}$$

$$\frac{0.01375 \text{ mol Zn}}{0.250 \text{ L}} = 0.0550 \text{ M } [\text{Zn}^{2+}]$$

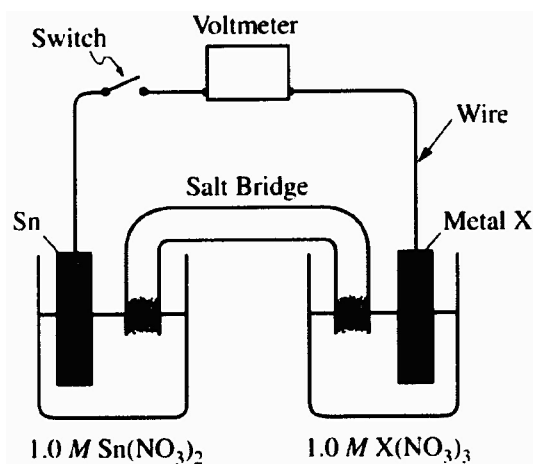


(c) $\Delta G^\circ = -nFE^\circ = -(2)(96500)(0.46 \text{ V}) = -89000 \text{ J}$

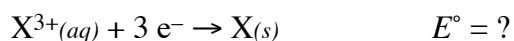
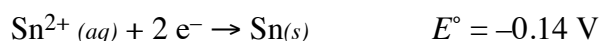
(d) $E_{\text{cell}} = E^\circ - \frac{0.0592}{2} \log \frac{[\text{Cu}^{2+}]}{[\text{Ag}^+]^2} = 0.46 - \frac{0.0592}{2} \log \frac{0.045}{0.010^2} = 0.38 \text{ V}$

- (e) yes; any reaction is spontaneous with a positive voltage

2004 D Required



An electrochemical cell is constructed with an open switch, as shown in the diagram above. A strip of Sn and a strip of unknown metal, X are used as electrodes. When the switch is closed, the mass of the Sn electrode increases. The half-reactions are shown below.



- (a) In the diagram above, label the electrode that is the cathode. Justify your answer.

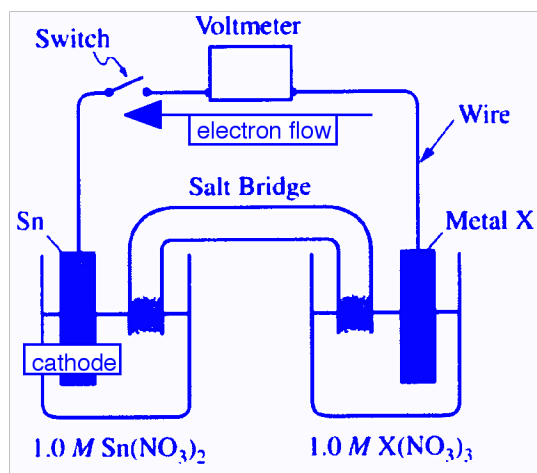
Electrochemistry

page 18

- (b) In the diagram above, draw an arrow indicating the direction of electron flow in the external circuit when the switch is closed.
- (c) If the standard cell potential E°_{cell} is +0.60 V, what is the standard potential, in volts for the X^{3+}/X electrode?
- (d) Identify metal X.
- (e) Write balanced net-ionic equation for the overall chemical reaction occurring in the cell.
- (f) In the cell, the concentration of Sn^{2+} is changed from 1.0 M to 0.50 M, and the concentration of X^{3+} is changed from 1.0 M to 0.10 M.
- (i) Substitute all appropriate values for determining the cell potential, E_{cell} , into the Nernst equation. (Do not do any calculations.)
- (ii) On the basis of your response in (f) (i), will the cell potential be greater than, less than, or equal to E°_{cell} ? Justify your answer.

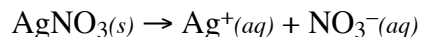
Answer:

- (a) tin electrode is the cathode; cathode is the site of reduction (gain in electrons) and will convert metal ions into a metal.



- (b) (see diagram)
- (c) red: $\text{Sn}^{2+}(\text{aq}) + 2 \text{e}^- \rightarrow \text{Sn}(\text{s})$ $E^\circ = -0.14 \text{ V}$
 oxid: $\text{X}(\text{s}) - 3 \text{e}^- \rightarrow \text{X}^{3+}(\text{aq})$ $E^\circ = +0.74 \text{ V}$
 $E^\circ_{\text{cell}} = +0.60 \text{ V}$
 red: $\text{X}^{3+}(\text{aq}) + 3 \text{e}^- \rightarrow \text{X}(\text{s})$ $E^\circ = -0.74 \text{ V}$
- (d) Cr
- (e) $3 \text{Sn}^{2+} + 2 \text{Cr} \rightarrow 3 \text{Sn} + 2 \text{Cr}^{3+}$
- (f) (i) $E^\circ_{\text{cell}} = 0.60 - \frac{0.0592}{6} \log \left(\frac{(0.10)^2}{(0.50)^3} \right)$
 (ii) greater; •

2005 D



The dissolving of $\text{AgNO}_3(\text{s})$ in pure water is represented by the equation above..

- (a) Is ΔG for the dissolving of $\text{AgNO}_3(\text{s})$ positive, negative, or zero? Justify your answer.

Electrochemistry

page 19

- (b) Is ΔS for the dissolving of $\text{AgNO}_3(s)$ positive, negative, or zero? Justify your answer.
- (c) The solubility of $\text{AgNO}_3(s)$ increases with increasing temperature.
- (i) What is the sign of ΔH for the dissolving process? Justify your answer.
- (ii) Is the answer you gave in part (a) consistent with your answers to parts (b) and (c) (i)? Explain.

The compound NaI dissolves in pure water according to the equation $\text{NaI}(s) \rightarrow \text{Na}^+(aq) + \text{I}^-(aq)$. Some of the information in the table of standard reduction potentials given below may be useful in answering the questions that follow.

Half-reaction	E° (V)
$\text{O}_2(g) + 4 \text{H}^+ + 4 e^- \rightarrow 2 \text{H}_2\text{O}(l)$	1.23
$\text{I}_2(s) + 2 e^- \rightarrow 2 \text{I}^-$	0.53
$2 \text{H}_2\text{O}(l) + 2 e^- \rightarrow \text{H}_2(g) + 2 \text{OH}^-$	-0.83
$\text{Na}^+ + e^- \rightarrow \text{Na}(s)$	-2.71

- (d) An electric current is applied to a 1.0 M NaI solution.
- (i) Write the balanced oxidation half reaction for the reaction that takes place.
- (ii) Write the balanced reduction half-reaction for the reaction that takes place.
- (iii) Which reaction takes place at the anode, the oxidation reaction or the reduction reaction?
- (iv) All electrolysis reactions have the same sign for ΔG° . Is the sign positive or negative? Justify your answer.

Answer:

- (a) sign of $\Delta G = (-)$; since the dissolving of silver nitrate is spontaneous, then $\Delta G < 0$
- (b) sign of $\Delta S = (+)$; an increase in entropy occurs when a solid becomes aqueous and the products contain more particles than the reactants.
- (c) (i) sign of $\Delta H = (+)$; an endothermic process will be favored when the temperature is increased.
(ii) yes; $\Delta G = \Delta H - T\Delta S$, as the temperature increases the $-T\Delta S$ term will increase, keeping ΔG negative.
- (d) (i) $2 \text{I}^- \rightarrow \text{I}_2(s) + 2 e^-$
(ii) $2 \text{H}_2\text{O}(l) + 2 e^- \rightarrow \text{H}_2(g) + 2 \text{OH}^-$
(iii) anode = oxidation
(iv) sign $\Delta G^\circ = (+)$; by definition, an electrolysis is a non-spontaneous process and requires the input of energy to get it to proceed.